



1

# On a Vacation

Festival time at Manchadikkara!

Abhinand and Nandana came from town  
with their parents.

Chatted with grandma.

Unni showed them round.

## Site Seeing

Abhinand, Nandana and Unni gathered gooseberries.



See the berries in groups. Write the number.



Unni



Abhinand




Nandana



Who got the most?

Who got the least?

Other friends joined them.  
Shared the berries with them.



How many berries did Namitha get?

$$\boxed{4} + \boxed{6} + \boxed{5}$$

$$\quad \quad \quad \boxed{10} \quad + \quad \boxed{5} = \boxed{\quad}$$

This is what each gave Nuzrath :

Abhinand  $\boxed{3}$  Unni  $\boxed{5}$  Nandana  $\boxed{6}$

How many did Nuzrath get?

$$\boxed{\quad} + \boxed{\quad} + \boxed{\quad}$$

$$\quad \quad \quad \boxed{\quad} \quad + \quad \boxed{\quad} = \boxed{\quad}$$

How many more does Nuzrath need to becomes equal as Namitha?  $\boxed{\quad}$

### Find it

8	1	6
3	5	7
4	9	2

Let's add three numbers across

$$8 + 1 + 6 =$$

And three numbers down

$$6 + 7 + 2 =$$

Add other numbers like this.

What do you see?

## Drama Theatre

25<sup>th</sup> year of Smiley Club!

Friends went to watch a drama

Unni's seat number is 36.

Abhinand on his left and Nandana on the right.

Find their seats and write the numbers on it.



Unni



Abhinand



Nandana

1									10	Nuzrath 45
11									20	David 23
21									30	Sanju 5
31					36				40	Devika 28
41									50	Babitha 49

Unni's friends are also there to see the drama.

Find their seats also and mark the numbers.

### Find and write

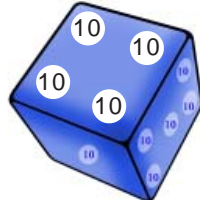
What is the number between 18 and 20?

Add 10 again and again and write the numbers.

## Playing with dice

Father has made a couple of dice. Unni and friends play with it.

Look at what Unni got.



How many points for him?

4 tens on the blue dice =  $10 + 10 + 10 + 10 = 40$

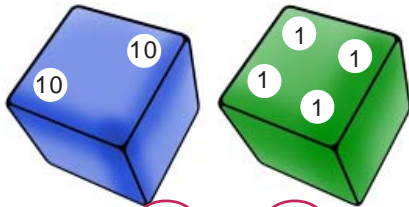
6 ones on the green dice =  $1 + 1 + 1 + 1 + 1 + 1 = 6$

40 and 6 make 46.

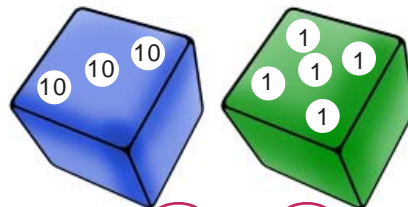
Unni got 46 points.

Find others' points and write them.

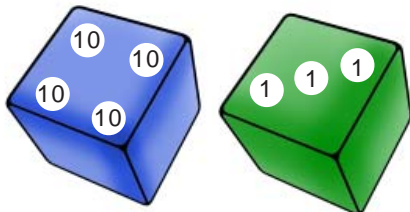
Abinand



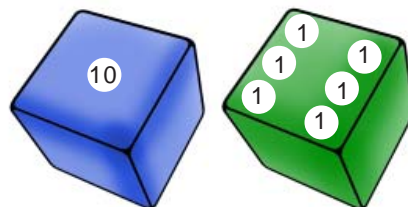
Nandana



Namitha



Nuzrath




First place for the person who got most points.

Second place for the next and so on.

Write them in order, from most to least

And the names too!



You can also play dice and make a table of scores.

## Ask your friends!



Ques. : *I have only one ten,  
But ones - I have six  
Can you say who I am?*

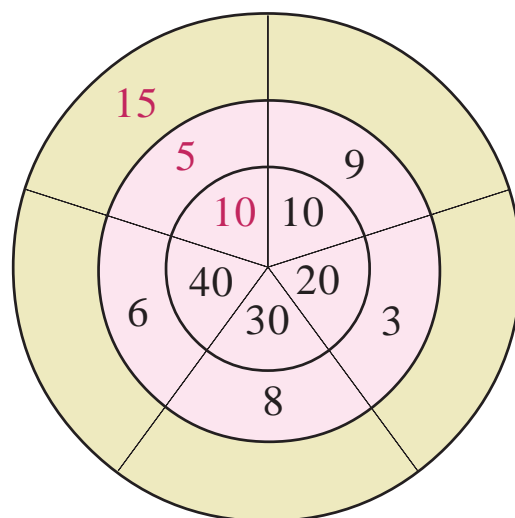
Ans. : *I can, I can, sixteen.*



Make up such riddles to ask your friends.

## What is the number?

Only one number is written on the outer ring. Find others and write them.



## Queen and sons



### The is how you play

- A long *eerkkil* piece is the queen. Ten short pieces are her sons.
- Toss them together on the floor.
- The long *eerkkil* should touch one small *eerkkil*, at least.
- Using one *eerkkil*, take out each piece; the others should not move.
- 10 points for the queen and 1 point for each son.
- Calculate points in each round.
- Play two or three rounds
- Winner is the one who scores most points

See the points Nandana and others got after 3 rounds.

Name	Queen	Sons	tens	Ones	Point
Abhinand	≡	≡ ≡ ≡ ≡ ≡ ≡ ≡ ≡ ≡	2	8	28
Nandana	≡	≡ ≡ ≡ ≡ ≡ ≡ ≡ ≡ ≡			
Namita	≡	≡ ≡ ≡ ≡ ≡ ≡ ≡ ≡ ≡			
Nusrath	≡	≡ ≡ ≡ ≡ ≡ ≡ ≡ ≡ ≡			
Unni	≡	≡ ≡ ≡ ≡ ≡ ≡ ≡ ≡ ≡			
Sanju					29

Who got the most points?

Write the points from the least to the most

How did you do it?

To get as many points as a queen, how many sons must be taken?

Sanju got 29 points

How many queens?

Sons?

## What is the number?

Tens, we are four  
Ones, we are three  
When we join, tens and ones  
Can you tell the number  
made?



Tens, we go to ones  
Ones, we got to tens  
Changing places like this  
Tell the number made



## Volleyball match

Second day at Smiley Club.

Abhinand, Nandana and Unni are there.

They heard the loudspeaker say:

*Smiley Club has won  
the first set by 5  
points*

*Unity Club has won the  
second set, scoring 3  
points more than  
Smiley's 22*





Here is the scoreboard.

Fill in the missing scores.

Winning two of three sets will get the cup.

Set	Point	
	Unity	Smiley
1	20	
2		22
3	21	25



You can announce the winner of the third set through a mike.

Now say, which club won the match?

## What is the number?

The number got by adding 5 to 23	
The number got by subtracting a from 30	
The number with 28 ones	
The number with 1 ten and 18 ones	
The number with 2 tens and 8 ones	

Like this, make up some problems with 16 as the answer.

Write them in words

16		<input type="text"/>
		<input type="text"/>
		<input type="text"/>
		<input type="text"/>

# Dominoes

Abhinand, Nandana and Unni are back home.

Let's play dominoes



In this game, one who scores the least points wins!

Teacher has taught you this game, right?

Look at the dominoes and write the points:

Abhinand	Unni	Nandana
<input type="text" value="8"/>	<input type="text"/>	<input type="text"/>

Who won the game?

Nandana got how many points more than Abhinand?

To get 13, What should we add to 8?  
 $8 + 5 = 13$ ,  
 isn't it?  
 So 5 points more.

Suppose we take away 8 from 13?  
 $13 - 8 = 5$   
 Then also, we get is 5

Nandana got how many points more than Unni?

What is the difference between Abhinand's and Unni's points?

In the next round, Abhinand get 10 points.

What are the possible dominos in his hand? Draw dots.

# Pooram

Nandana looked at the calender.

Today is  
May 20  
Wednesday



MAY 2015						
SUN ഞായർ	MON തിങ്കൾ	TUE ചൊവ്വ	WED ബുധൻ	THU വ്യാഴം	FRI വെള്ളി	SAT ശനി
31					1	2
3	4	5	6	7	8	9
10	11	12	13	14	15	16
17	18	19	20	21	22	23
24	25	26	27	28	29	30

Pooram at  
the temple is on  
May 23



Which day is May 23?

We go back the  
Wednesday



Bust school  
starts only after  
four more days.



On which date, are they going back to town?

Which dates are Fridays? Write in order.

Which dates are Saturdays? Write in order.

What's relation between these dates?

What I found

## Pooram day

They all bathed and dressed and went to the temple

### Festival band

*So many sights to see!*

*So many sounds to hear!*

*Trumpeters seven, Pey! Pey! Pey!*

*Drummers eight, Dum! Dum! Dum!*

*Cymbal five, Neem! Neem! Neem!*

*Several sounds in harmony,*

*Great is the band in unity!*

How many in the band in all?

Trumpeters

Drummers

Cymbalists

Total




## Ornamental Umbrellas

People lined up carrying ornamental umbrellas

How beautiful !

Abhinand and Nandana stood staring at them.



How many of small umbrellas

Green umbrellas

Red umbrellas

Which is more?

How much more?

## Festival Market

Price List	
Toys	Price (for one)
Balloon	5
Ball	20
Car	16
Doll	15
Whistle	6



- Abhinand bought a ballon and a ball.  
How many rupees?
- Abhinand gave 3 ten rupee notes.  
How much would he get back?
- Unni bought toys for 21 rupees.  
What is the price of each?
- Which are the two toys you like among these?  
How much do you need to buy them?
- Nandana has 20 rupees with her.  
What are prices of the toys Nandana can buy?

Uncle bought Nandana some bangles.

Two packets of 10 each and 6 more.

How many in all?

She wants bangles in both her hands.

How many bangles in each hand?

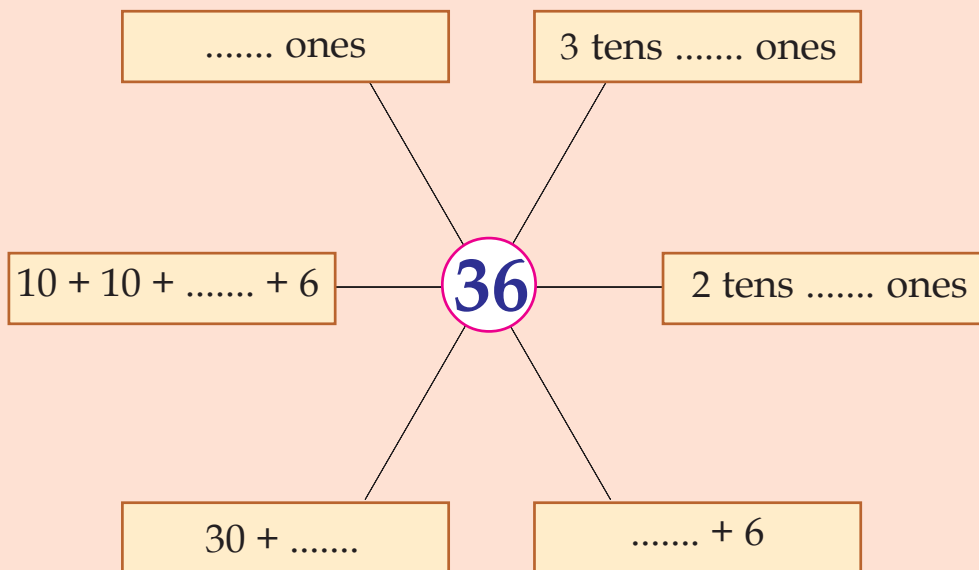


I found		My friend found	
Left hand	Right hand	Left hand	Right hand
18	8		



## Let's do!

- Fill in the boxes



- What is the number?                      How do we write it?

2 tens 3 ones	<input type="text"/>	32
4 tens	<input type="text"/>	50
14 ones	<input type="text"/>	18
4 ones 3 tens	<input type="text"/>	43
1 ten 14 ones	<input type="text"/>	26

- In each row mark for the largest number with ✓ and mark smallest number with ○.

25	52	50
48	38	84
30	60	40
18	81	91
27	72	57

Arrange the numbers marked ✓ from the smallest to the largest.

Arrange the numbers marked ○ from the largest to the smallest.

- Babitha bought two packets of red bangles, one packet of black bangles and 8 green bangles. Each packet contains 10 bangles. How many bangles did she buy in all?
- Sanju, his father, mother and sister went to see a movie. They got 4 seats in a row, numbers starting from 41. Sanju sat on the last seat. What is his seat number?